
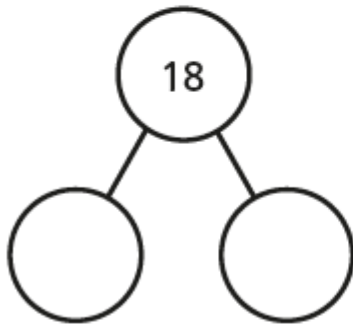


Look at the picture.



Complete the part-whole model and fact family.



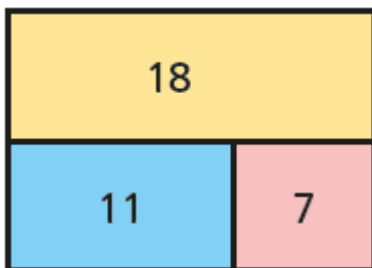
$$\square + \square = 18$$

$$\square + \square = 18$$

$$18 - \square = \square$$

$$18 - \square = \square$$

a)



$$\square + \square = \square$$

$$\square + \square = \square$$

$$\square - \square = \square$$

$$\square - \square = \square$$