

There are 7 birds in a tree



5 more fly into the tree.

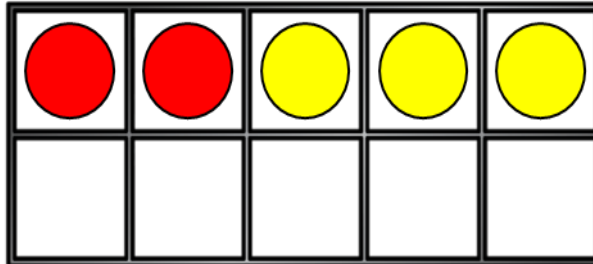
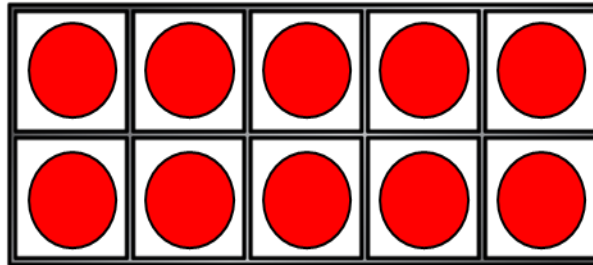


How many birds are there now?

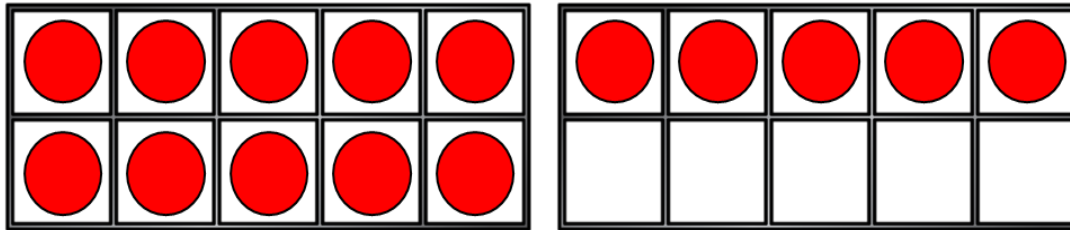
There are \_\_\_\_ birds now.

Complete the number sentence.

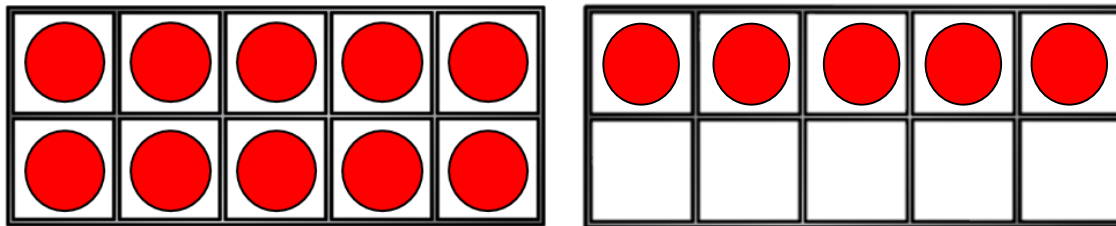
$$12 + 3 = \square$$



Work out  $15 + 4 = \square$



Work out  $15 - 4 = \square$



Join the number sentences  
which have the same total.  
One has been done for you.

$15 + 3$

$9 + 10$

$10 + 9$

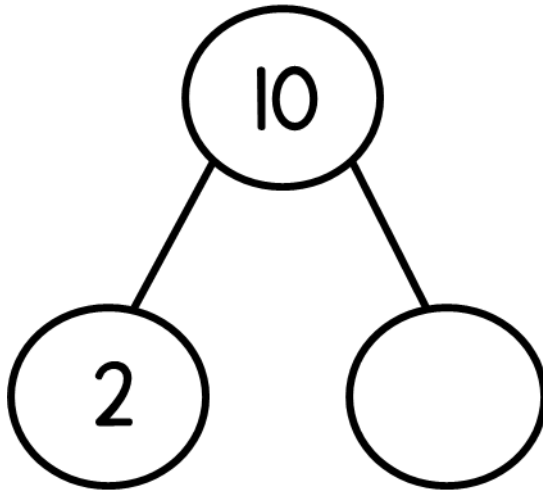
$11 + 5$

$12 + 4$

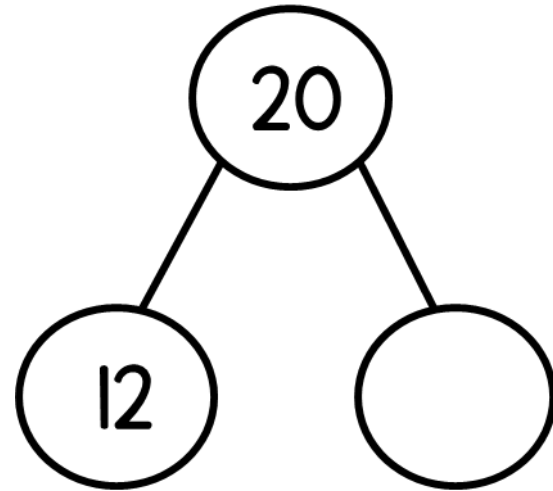
$13 + 5$



Complete the part-whole models.

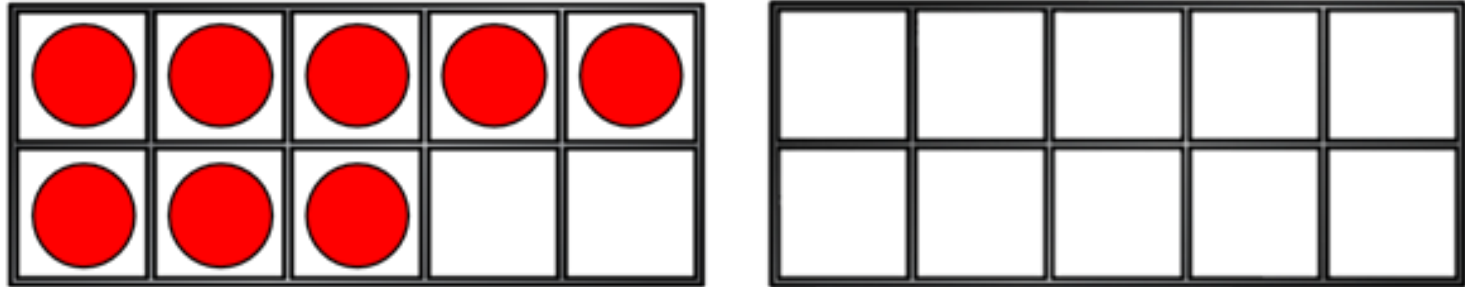


$$10 = 2 +$$



$$20 = 12 +$$

Mo has 8 counters



He adds 6 more counters.


How many counters does he have now?

Mo has \_\_\_\_ counters now

Work out  $6 + 9 = \square$

Eva has 2 bags of marbles.  
She has 20 marbles altogether.

Circle the bags she has.





Complete the number sentences.

$$15 + 3 < 15 + \square$$

$$15 + \square < 19 + \square$$