


2D Shape Word Mat




circle



rectangle



triangle




oval



octagon



square



heptagon




rhombus



pentagon



hexagon

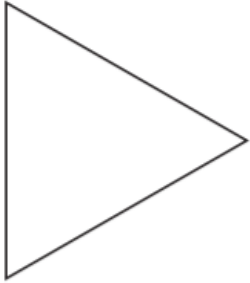


kite

Maths Resources – Tuesday




Investigating Lines of Symmetry



Name _____

Sides _____

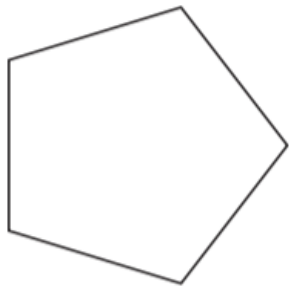
Lines of Symmetry _____



Name _____

Sides _____

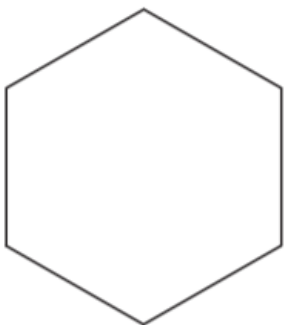
Lines of Symmetry _____



Name _____

Sides _____

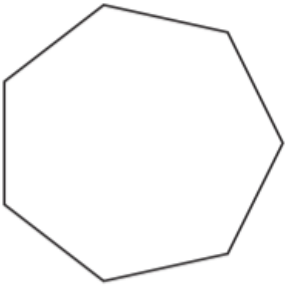
Lines of Symmetry _____



Name _____

Sides _____

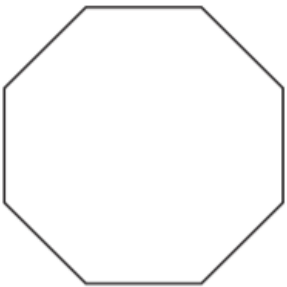
Lines of Symmetry _____



Name _____

Sides _____

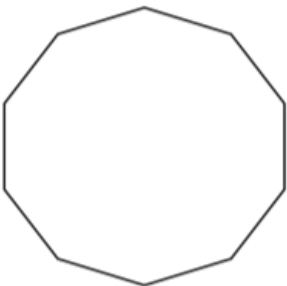
Lines of Symmetry _____



Name _____

Sides _____

Lines of Symmetry _____



Name _____

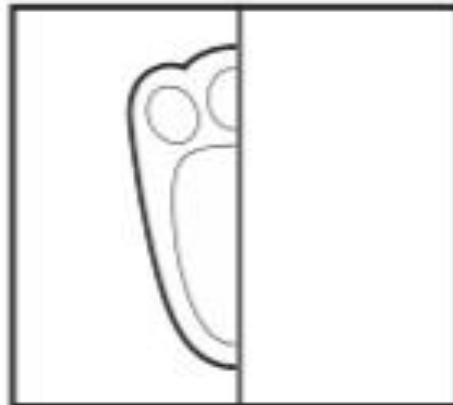

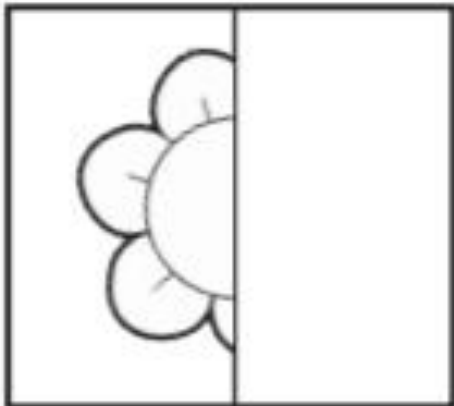
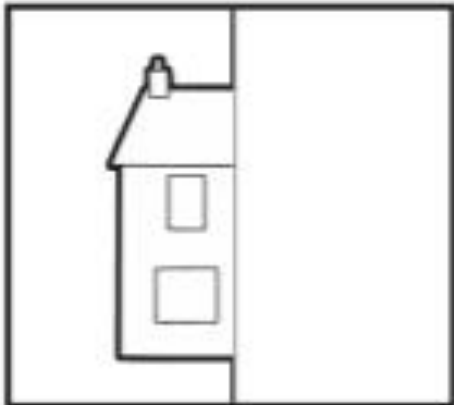
Sides _____

Lines of Symmetry _____

Wednesday EXT:

Draw the Other Half

Complete the pictures below by drawing the other half.
Finish the pictures by colouring them in.




3D Shapes



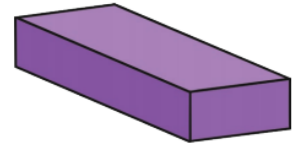
square-based pyramid



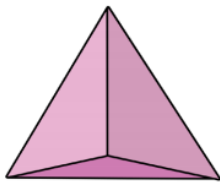
triangular prism



cone



cuboid




tetrahedron



cube



cylinder



sphere