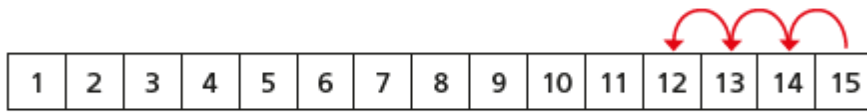



- 1 Ron uses a number track to work out $15 - 3$




$15 - 3 = 12$

a) $14 - 3 =$



b) $15 - 4 =$



c) $14 - 4 =$

