

# Flashback 4

Year 1 | Week 8 | Day 2

1) Complete the sentence using taller or shorter.



The hen is \_\_\_\_\_ than the frog.



2) Compare using  $<$ ,  $>$  or  $=$

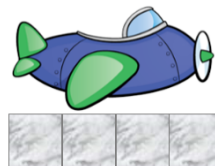

$$13 \bigcirc 31$$

3) How many tens are in 43?

4) Subtract 5 from 12



Whitney measures the length of two toys.



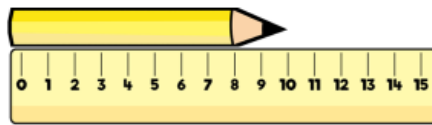
She says,



The toys are the same length.

Do you agree with Whitney?  
Explain your answer.

Teddy measures the length of the pencil.



He says,



The length of the pencil is 10 cm.

Do you agree with Teddy?  
Explain why.

Eva, Dexter and Rosie are comparing ribbons that they have.

MC

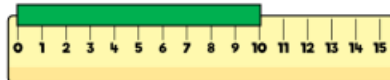
Unfortunately, Dexter has lost his ribbon.

He says,

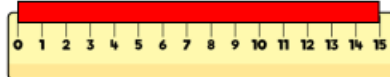


My ribbon is shorter than Rosie's, but longer than Eva's.

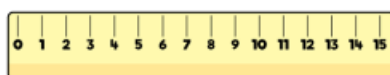
Eva



Rosie



Dexter



How long could Dexter's ribbon be?