









Maths Tuesday

Directions: Measure the length of each crayon in centimeters and write your answer in the space provided.

1.		<input type="text"/>
2.		<input type="text"/>
3.		<input type="text"/>
4.		<input type="text"/>
5.		<input type="text"/>
6.		<input type="text"/>
7.		<input type="text"/>
8.		<input type="text"/>

Object	Height in cm