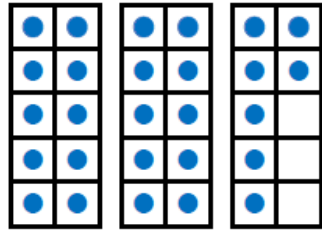


4a. Jen is counting backwards from 27.



She says,

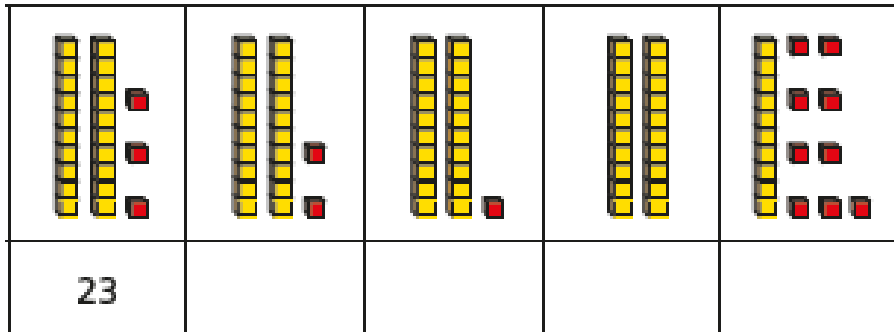


27, 26, 25...

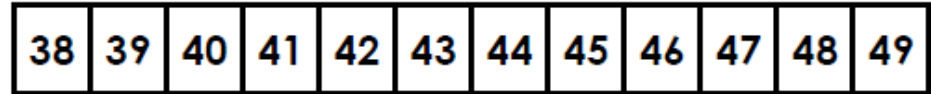
What number will she say next?



VF

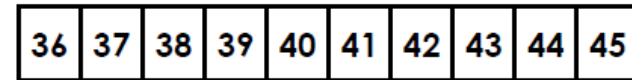


7b. Count forwards using the number track. What number will you say after 41?



VF

8b. Ben is counting backwards from 41.



He says,



41, 40, 39, 38...

What number will he say next?



VF