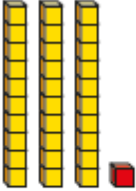
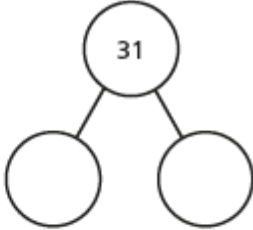

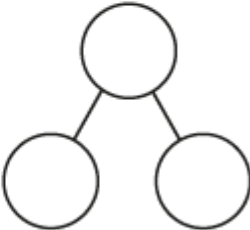
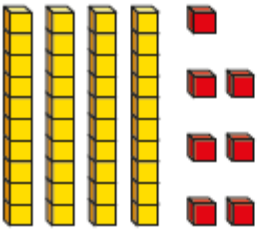
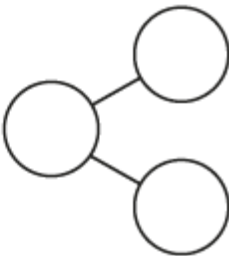


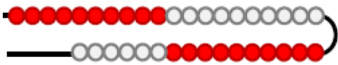
Complete the part-whole model for each picture.

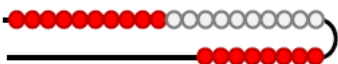
a)  

b)  

c)  

2b. Tick the representation that shows 36.


A. 

B. 



VF

4a. Use the representation below to complete the sentences.



There are \_\_\_ tens.

There are \_\_\_ ones.

The number is \_\_\_\_\_.



VF