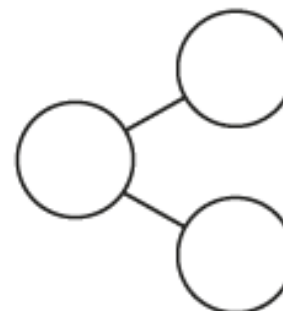
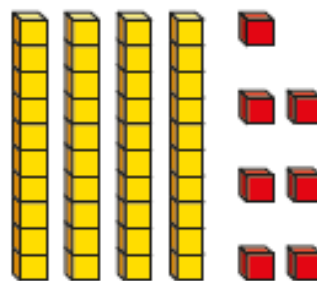
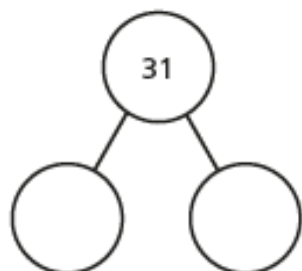
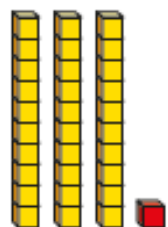



Complete the part-whole model for each picture.

a)



4a. Use the representation below to complete the sentences.



There are \_\_\_ tens.

There are \_\_\_ ones.

The number is \_\_\_\_\_.



Draw a picture to match each part-whole model.

a)

