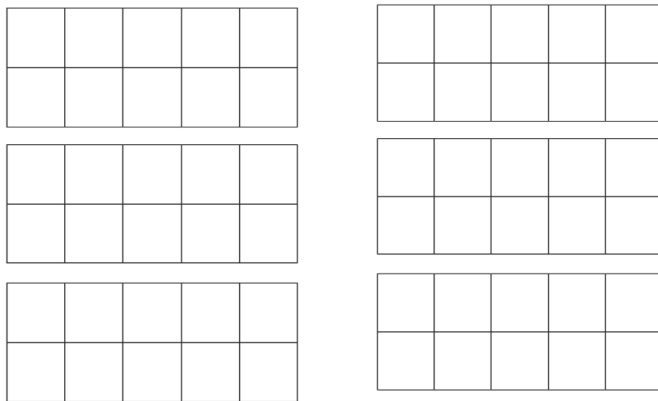


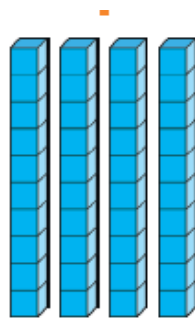

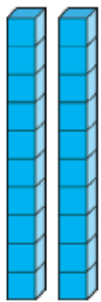


1) Use the tens frames to show the number 30.



2) What is the total?



3) Rosie and Sophie have 10 sweets each, how many sweets do they have altogether?

4) There are 10 cows in a farmer's field. How many cows are there in 4 farmer's fields?

5) Sam's mum gives him 10p on Monday, 10p on Tuesday, 10p on Wednesday, 10p on Thursday and 10p on Friday, How much money does Sam have on Friday?