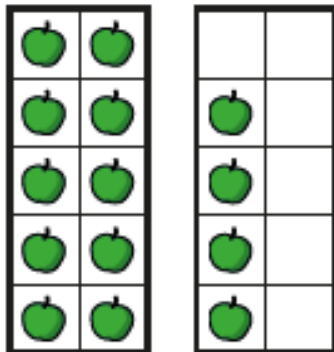
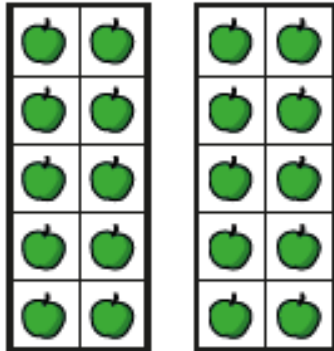


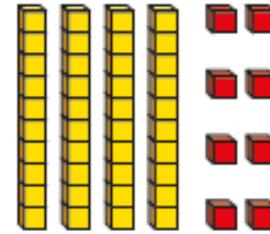
1 How many apples are there?



There are tens and ones.

There are apples.

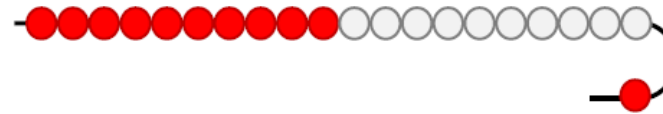
2 What number is shown?



There are tens and ones.

The number shown is

1b. Complete the sentence below.



There are tens and one.

